

Exercice 1 :

1/ Les contraintes principales :

$$\sigma_{ij} = \begin{bmatrix} 120 & 0 & 0 \\ 0 & 40 & 10 \\ 0 & 10 & 40 \end{bmatrix}$$

$$\det(\sigma_{ij} - \lambda I) = \det \begin{bmatrix} 120 - \lambda & 0 & 0 \\ 0 & 40 - \lambda & 10 \\ 0 & 10 & 40 - \lambda \end{bmatrix} = 0$$

$$\Rightarrow (120 - \lambda)(30 - \lambda)(50 - \lambda) = 0$$

$$\begin{cases} \sigma_1 = \lambda_1 = 120 \\ \sigma_2 = \lambda_2 = 50 \\ \sigma_3 = \lambda_3 = 30 \end{cases}$$

2/ Déterminons la contrainte totale T :

$$T = \sigma_{ij} \cdot n = \begin{bmatrix} 120 & 0 & 0 \\ 0 & 40 & 10 \\ 0 & 10 & 40 \end{bmatrix} \cdot \begin{bmatrix} 1/\sqrt{3} \\ \sqrt{2}/\sqrt{3} \\ 0 \end{bmatrix}$$

$$T = \begin{bmatrix} \frac{120}{\sqrt{3}} & \frac{40\sqrt{2}}{\sqrt{3}} & \frac{10\sqrt{2}}{\sqrt{3}} \end{bmatrix}$$

$$\Rightarrow \|T\| = \sqrt{\left(\frac{120}{\sqrt{3}}\right)^2 + \left(\frac{40\sqrt{2}}{\sqrt{3}}\right)^2 + \left(\frac{10\sqrt{2}}{\sqrt{3}}\right)^2} \approx 77 \text{ MPa}$$

La contrainte normale σ_n :

$$\sigma_n = \begin{bmatrix} \frac{1}{\sqrt{3}} & \frac{\sqrt{2}}{\sqrt{3}} & 0 \end{bmatrix} \cdot \begin{bmatrix} 120 & 0 & 0 \\ 0 & 40 & 10 \\ 0 & 10 & 40 \end{bmatrix} \cdot \begin{bmatrix} 1/\sqrt{3} \\ \sqrt{2}/\sqrt{3} \\ 0 \end{bmatrix}$$

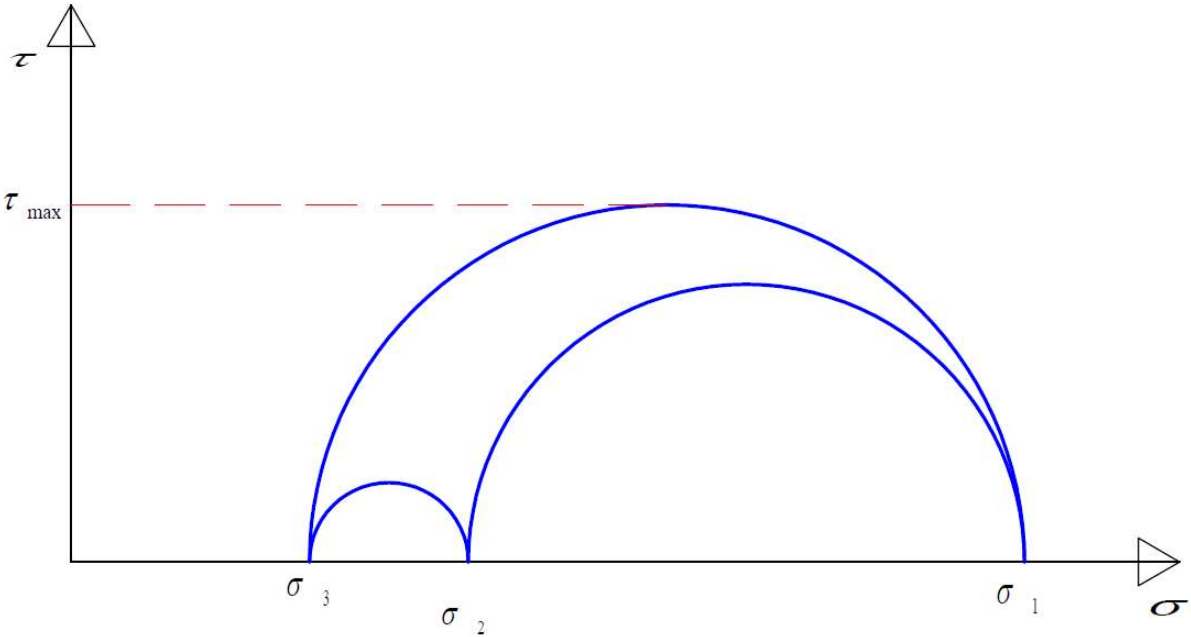
$$\Rightarrow \sigma_n = 66,6 \text{ MPa}$$

La contrainte tangentielle τ :

$$\vec{\tau} = \vec{T} - \sigma_n \cdot \vec{n}$$

$$\Rightarrow \tau = \sqrt{T^2 - (\sigma_n \cdot n)^2} \Rightarrow \tau = 38,5 \text{ MPa}$$

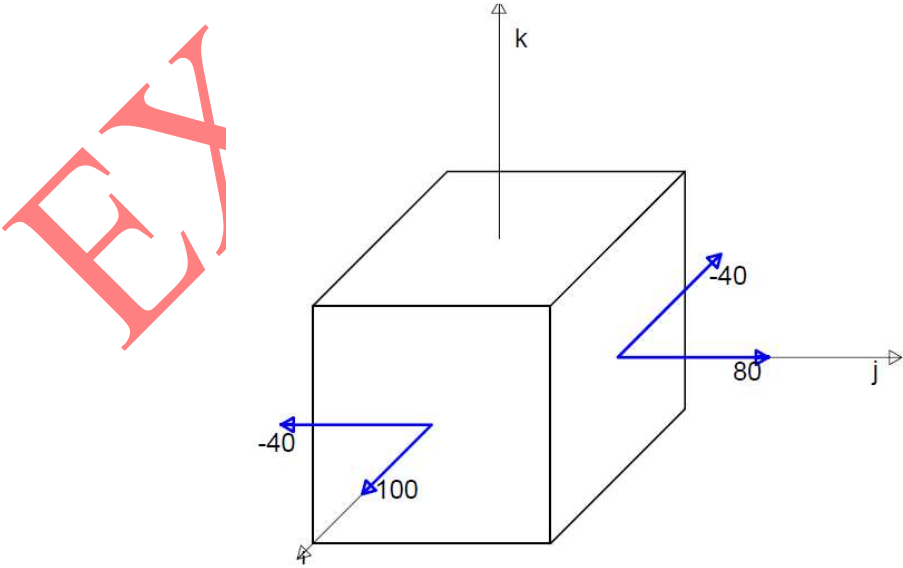
La contrainte tangentielle maximale :



$$\tau_{\max} = \frac{\sigma_3 - \sigma_1}{2} = 45 \text{ MPa}$$

Exercice 2 :

1/



2/

a/ Calculons les composantes du vecteur contrainte :

$$\vec{T}(M, \vec{n}) = [\sigma(M)] \vec{n}$$

$$\{n\} = \frac{1}{\sqrt{5}} \begin{Bmatrix} 1 \\ 2 \\ 0 \end{Bmatrix}$$

$$\Rightarrow \vec{T}(M, \vec{n}) = \begin{bmatrix} 100 & -40 & 0 \\ -40 & 80 & 0 \\ 0 & 0 & 0 \end{bmatrix} \cdot \frac{1}{\sqrt{5}} \begin{bmatrix} 1 \\ 2 \\ 0 \end{bmatrix} = \frac{1}{\sqrt{5}} \begin{bmatrix} 20 \\ 120 \\ 0 \end{bmatrix}$$

b/ Calculons la contrainte normale :

$$\sigma_n = \vec{n} \cdot \vec{T}(M, \vec{n}) = \frac{1}{\sqrt{5}} (1 \ 2 \ 0) \cdot \frac{1}{\sqrt{5}} \begin{bmatrix} 20 \\ 120 \\ 0 \end{bmatrix} = 52 \text{ MPa}$$

c/ Les composantes du vecteur cisaillement :

$$\vec{\tau}_n = \vec{T}(M, \vec{n}) - \sigma_n \vec{n} = \frac{1}{\sqrt{5}} \begin{bmatrix} 20 \\ 120 \\ 0 \end{bmatrix} - \frac{52}{\sqrt{5}} \begin{bmatrix} 1 \\ 2 \\ 0 \end{bmatrix} = \begin{bmatrix} -32/\sqrt{5} \\ 16/\sqrt{5} \\ 0 \end{bmatrix} \text{ MPa}$$

Exercice 3 :

$$\sigma = \begin{bmatrix} 2 & 0 & 1 \\ 0 & 2 & \sqrt{3} \\ 1 & \sqrt{3} & 2 \end{bmatrix} \text{ MPa}$$

$$\det(\sigma - \lambda I) \det \begin{bmatrix} 2-\lambda & 0 & 1 \\ 0 & 2-\lambda & \sqrt{3} \\ 1 & \sqrt{3} & 2-\lambda \end{bmatrix} = 0$$

$$\Rightarrow (2-\lambda)((2-\lambda)^2 - 4) = 0$$

$$\begin{cases} \sigma_1 = \lambda_1 = 4 \text{ MPa} \\ \sigma_2 = \lambda_2 = 2 \text{ MPa} \\ \sigma_3 = \lambda_3 = 0 \end{cases}$$

Pour $\sigma_1 = \lambda_1 = 4 \text{ MPa}$

$$(\sigma - \sigma_1 I) \vec{V}_1 = \vec{0} \Rightarrow \vec{V}_1 = \begin{pmatrix} 1/\sqrt{8} \\ \sqrt{2}/8 \\ 2/\sqrt{8} \end{pmatrix}$$

Pour $\sigma_2 = \lambda_2 = 2 \text{ MPa}$

$$(\sigma - \sigma_2 I) \vec{V}_2 = \vec{0} \Rightarrow \vec{V}_2 = \begin{pmatrix} \sqrt{3}/2 \\ -1/2 \\ 0 \end{pmatrix}$$

Pour $\sigma_3 = \lambda_3 = 0$

$$(\sigma - \sigma_3 I) \vec{V}_3 = \vec{0} \Rightarrow \vec{V}_3 = \begin{pmatrix} 1/\sqrt{8} \\ \sqrt{3}/8 \\ -1/8 \end{pmatrix}$$

Exercice 4 :

1/ Les contraintes principales :

$$\sigma = \begin{bmatrix} -4 & \sqrt{2} & -\sqrt{2} \\ \sqrt{2} & -1 & 3 \\ -\sqrt{2} & 3 & -1 \end{bmatrix} \text{ (N/mm}^2\text{)}$$

$$\det(\sigma - \lambda I) = \det \begin{bmatrix} -4 - \lambda & \sqrt{2} & -\sqrt{2} \\ \sqrt{2} & -1 - \lambda & 3 \\ -\sqrt{2} & 3 & -1 - \lambda \end{bmatrix} = 0$$

$$\begin{cases} \sigma_1 = \lambda_1 = 2 \text{ MPa} \\ \sigma_2 = \lambda_2 = -2 \text{ MPa} \\ \sigma_3 = \lambda_3 = -6 \text{ MPa} \end{cases}$$

2/ Les directions principales normalisées :

Pour $\sigma_1 = \lambda_1 = 2 \text{ MPa}$

$$(\sigma - \sigma_1 I) \vec{v}_1 = \vec{0} \Rightarrow \vec{v}_1 = \begin{pmatrix} 0 \\ \sqrt{2}/2 \\ \sqrt{2}/2 \end{pmatrix}$$

Pour $\sigma_2 = \lambda_2 = -2 \text{ MPa}$

$$(\sigma - \sigma_2 I) \vec{v}_2 = \vec{0} \Rightarrow \vec{v}_2 = \begin{pmatrix} 1/\sqrt{2} \\ 1/2 \\ -1/2 \end{pmatrix}$$

Pour $\sigma_3 = \lambda_3 = -6 \text{ MPa}$

$$(\sigma - \sigma_3 I) \vec{v}_3 = \vec{0} \Rightarrow \vec{v}_3 = \begin{pmatrix} 1/\sqrt{2} \\ -1/2 \\ 1/2 \end{pmatrix}$$

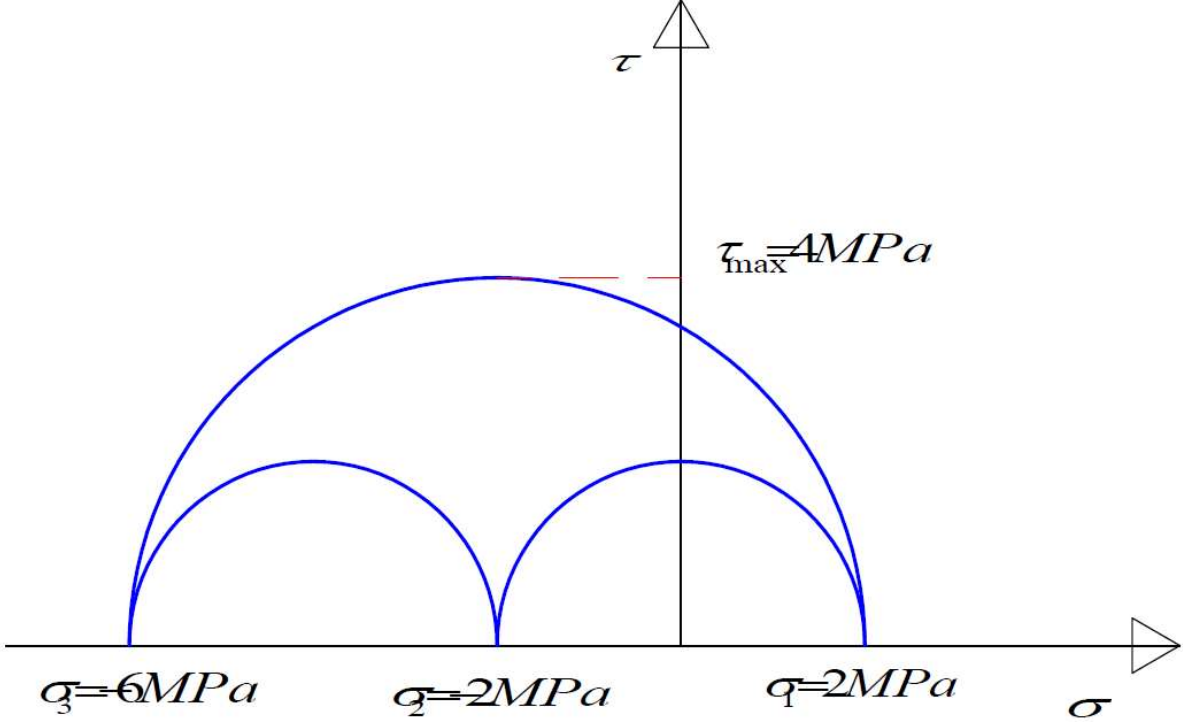
3/ La matrice C des cosinus directeurs des axes principaux :

$$C = \begin{bmatrix} 0 & \frac{\sqrt{2}}{2} & \frac{\sqrt{2}}{2} \\ \frac{\sqrt{2}}{2} & \frac{1}{2} & -\frac{1}{2} \\ \frac{\sqrt{2}}{2} & -\frac{1}{2} & \frac{1}{2} \end{bmatrix}$$

4/ La contrainte normale moyenne :

$$\sigma_{moy} = \frac{\sigma_1 + \sigma_2 + \sigma_3}{3} = -2$$

La contrainte tangentielle maximale :



5/ Vérifions les invariants des contraintes I₁ et I₃ :

$$I_1 = \text{Trace}(\sigma) = -6 \text{ MPa}$$

$$I_3 = \sigma_1 \sigma_2 \sigma_3 = 24$$

Exercice 5 :

1/ La dimension de T est : MPa

2/

$$\vec{T} = \sigma_{ij} \cdot \vec{n} = \begin{bmatrix} \sigma_{11} & \sigma_{12} & \sigma_{13} \\ \sigma_{21} & \sigma_{22} & \sigma_{23} \\ \sigma_{31} & \sigma_{32} & \sigma_{33} \end{bmatrix} \begin{bmatrix} \vec{e}_1 \\ \vec{e}_2 \\ \vec{e}_3 \end{bmatrix}$$

on a : (*) $\vec{T}(\vec{e}_1) = \sigma_0(-\vec{e}_1 - \gamma\vec{e}_3)$

$\sigma_{11} = -\sigma_0$ et $\sigma_{21} = 0$ et $\sigma_{31} = -\gamma\sigma_0$

(*) $\vec{T}(\vec{e}_3) \wedge \vec{e}_1 = -\sigma_0\vec{e}_2$

$$\begin{bmatrix} \sigma_{13} \\ \sigma_{23} \\ \sigma_{33} \end{bmatrix} \wedge \begin{bmatrix} 1 \\ 0 \\ 0 \end{bmatrix} = \begin{bmatrix} 0 \\ -\sigma_0 \\ 0 \end{bmatrix}$$

$$\Rightarrow \begin{bmatrix} 0 \\ \sigma_{33} \\ \sigma_{23} \end{bmatrix} = \begin{bmatrix} 0 \\ -\sigma_0 \\ 0 \end{bmatrix} \Rightarrow \begin{bmatrix} \sigma_{31} = 0 \\ \sigma_{33} = -\sigma_0 \\ \sigma_{32} = 0 \end{bmatrix}$$

(*) $\vec{T}(\vec{e}_2) \cdot \vec{e}_2 = -\sigma_0 \Rightarrow \begin{bmatrix} \sigma_{12} \\ \sigma_{22} \\ \sigma_{32} \end{bmatrix} \cdot \begin{bmatrix} 0 \\ 1 \\ 0 \end{bmatrix} \Rightarrow \sigma_{22} = -\sigma_0$

$$\Rightarrow \vec{\sigma} = \begin{bmatrix} -\sigma_0 & 0 & -\gamma\sigma_0 \\ 0 & -\sigma_0 & 0 \\ -\gamma\sigma_0 & 0 & -\sigma_0 \end{bmatrix}$$

3/ Les valeurs propres :

$$\det(\sigma - \lambda I) = \det \begin{bmatrix} -\sigma_0 - \lambda & 0 & -\gamma\sigma_0 \\ 0 & -\sigma_0 - \lambda & 0 \\ -\gamma\sigma_0 & 0 & -\sigma_0 - \lambda \end{bmatrix} = 0 \Rightarrow \begin{cases} \sigma_1 = \lambda_1 = -\sigma_0 \\ \sigma_2 = \lambda_2 = \sigma_0(\gamma - 1) \\ \sigma_3 = \lambda_3 = \sigma_0(-\gamma - 1) \end{cases}$$

Si $\gamma > 1$: $\lambda_2 > \lambda_1 > \lambda_3$

Si $\gamma < 1$: $\lambda_3 > \lambda_1 > \lambda_2$

Les vecteurs propres :

$$\text{Pour } \sigma_1 = \lambda_1 = -\sigma_0$$

$$(\sigma - \sigma_1 I)\vec{V}_1 = \vec{0} \Rightarrow \vec{V}_1 = \begin{pmatrix} 0 \\ 1 \\ 0 \end{pmatrix}$$

$$\text{Pour } \sigma_2 = \lambda_2 = \sigma_0(\gamma - 1)$$

$$(\sigma - \sigma_2 I)\vec{V}_2 = \vec{0} \Rightarrow \vec{V}_2 = \begin{pmatrix} \sqrt{2}/2 \\ 0 \\ -\sqrt{2}/2 \end{pmatrix}$$

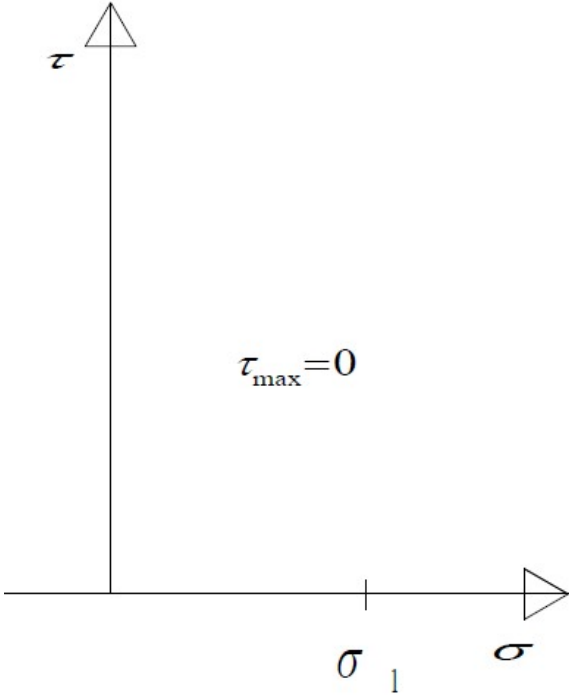
$$\text{Pour } \sigma_3 = \lambda_3 = \sigma_0(-\gamma - 1)$$

$$(\sigma - \sigma_3 I)\vec{V}_3 = \vec{0} \Rightarrow \vec{V}_3 = \begin{pmatrix} \sqrt{2}/2 \\ 0 \\ \sqrt{2}/2 \end{pmatrix}$$

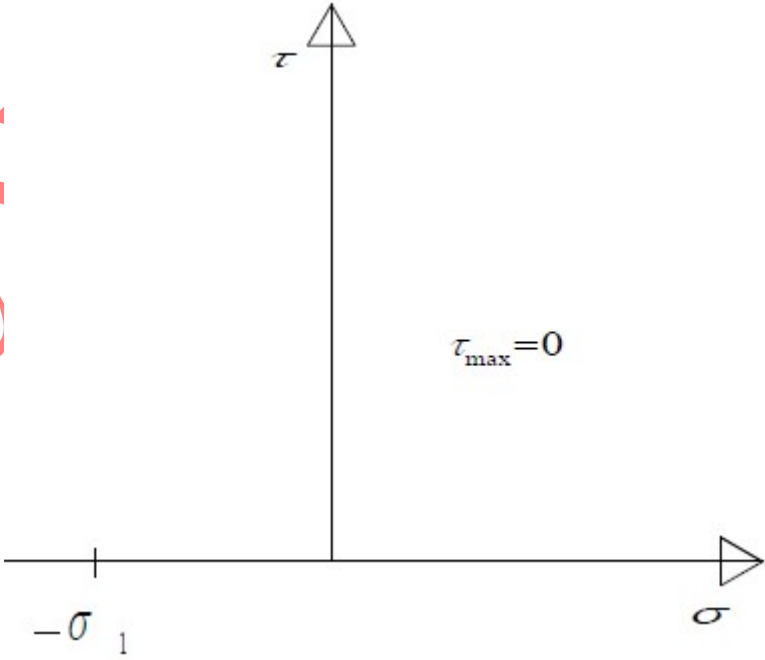
Exercise 6 :

1/

a/

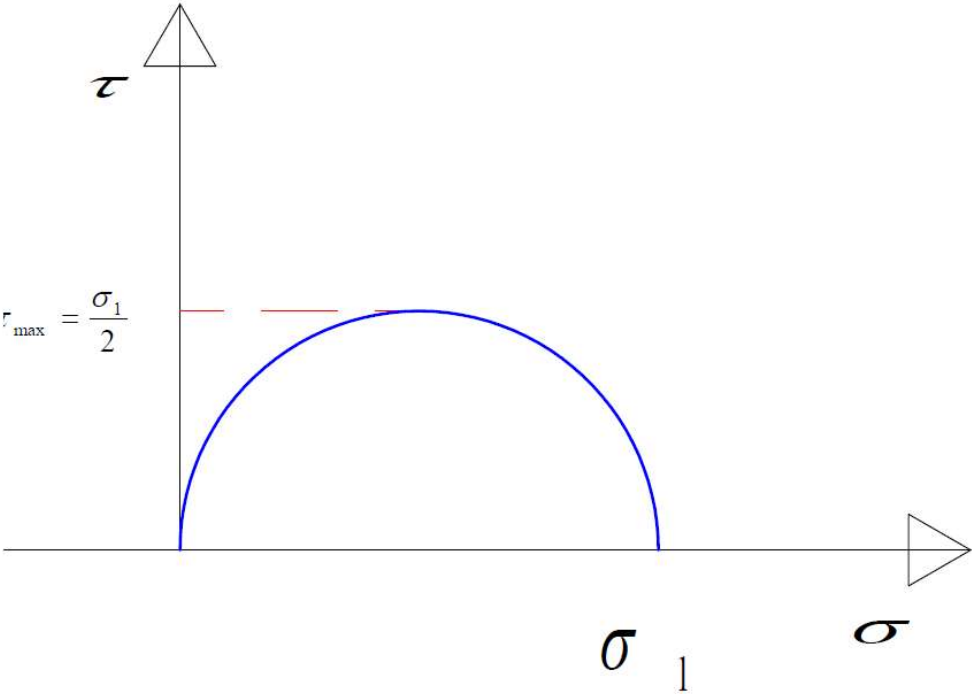


b/

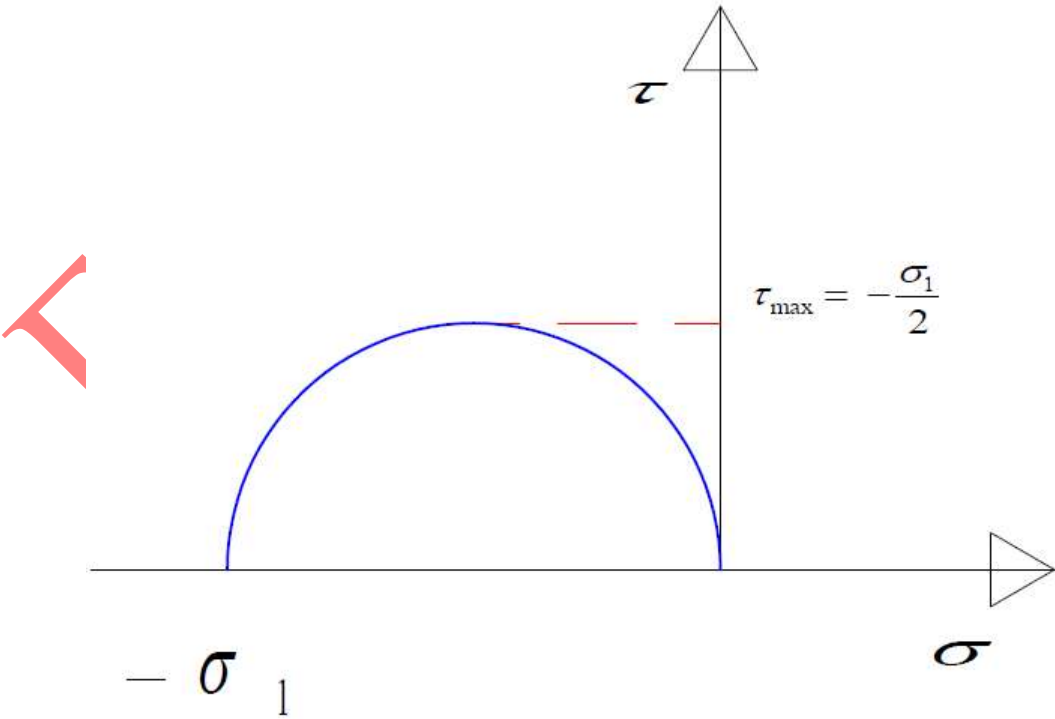


2/

a/

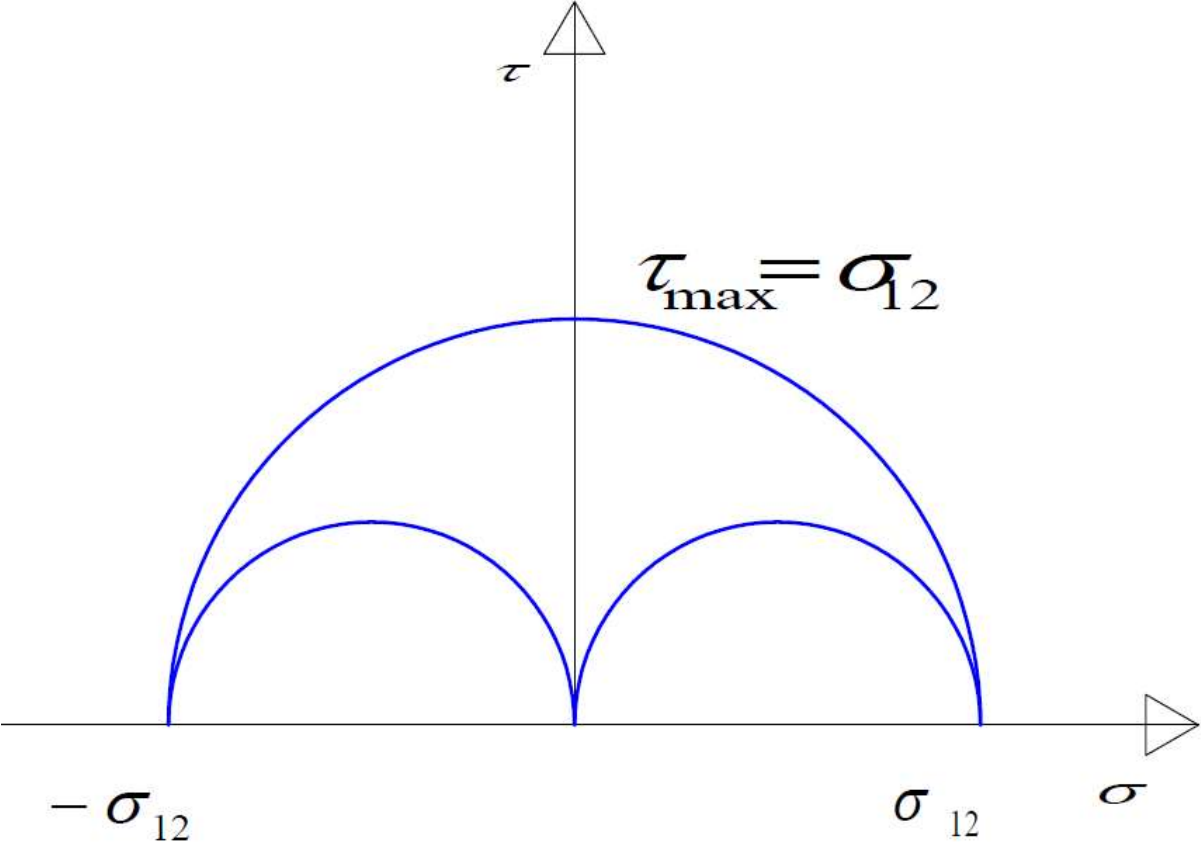


b/



3/ Cisaillement simple :

$$\det(\sigma - \lambda I) = \det \begin{bmatrix} -\lambda & \sigma_{12} & 0 \\ \sigma_{12} & -\lambda & 0 \\ 0 & 0 & -\lambda \end{bmatrix} = 0 \Rightarrow \begin{cases} \sigma_1 = \lambda_1 = 0 \\ \sigma_2 = \lambda_2 = \sigma_{12} \\ \sigma_3 = \lambda_3 = -\sigma_{12} \end{cases}$$



EX